

Name \_\_\_\_\_

Date \_\_\_\_\_




The Carbon Cycle

Match the parts of the carbon cycle with the pictures below.  
(Some statements may be used more than once).

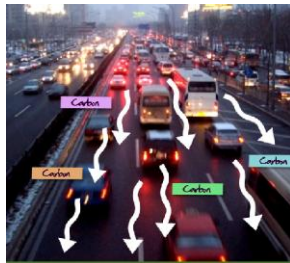
1. Animals exhale carbon dioxide.
2. Carbon dioxide is taken up during the process of photosynthesis.
3. Decomposers re-use carbon from dead organisms.
4. Oceans and oil and coal deposits are carbon sinks.
5. Carbon dioxide is released into the atmosphere when fossil fuels are burned.



\_\_\_\_\_



\_\_\_\_\_



\_\_\_\_\_




\_\_\_\_\_



\_\_\_\_\_



\_\_\_\_\_



\_\_\_\_\_